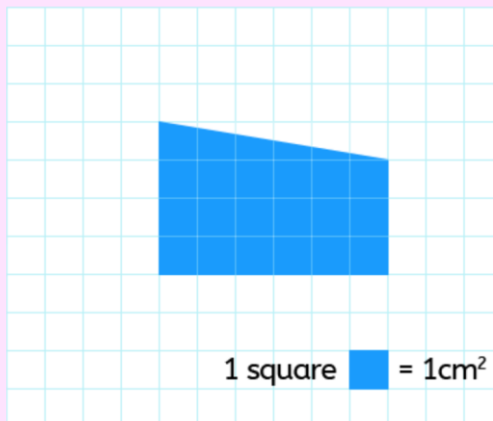


Rectangles

	Width	Height
A.	5m	5m
B.	6m	4m
C.	7m	3m
D.	9m	2m

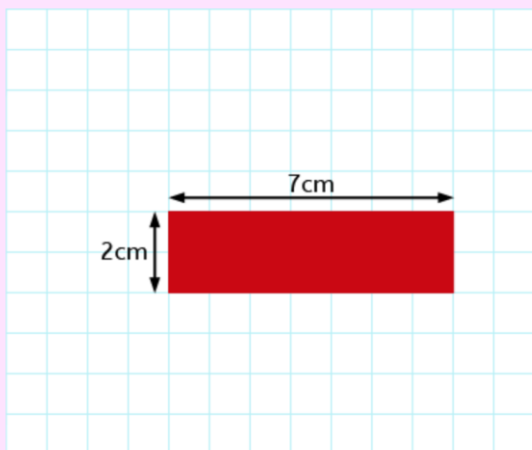
Which rectangle has the smallest area?

- D
 B
 C
 A



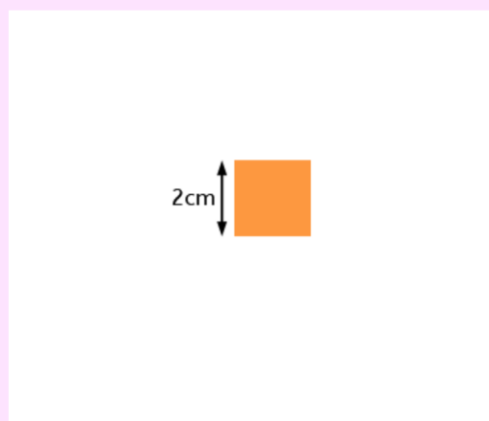
Which is the best estimate for the area of the shape in square centimetres?

- 21cm²
 19cm²
 24cm²
 18cm²



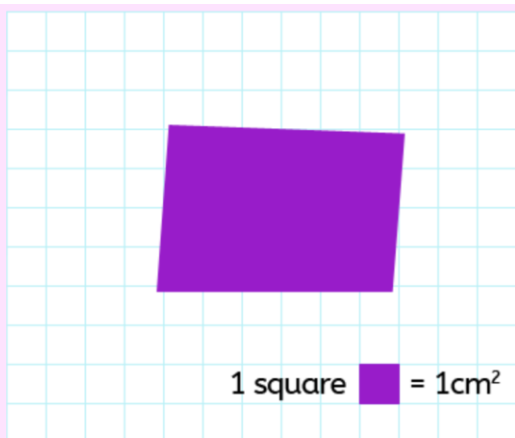
What is the area of the rectangle in square centimetres?

cm²



What is the area of the square in square centimetres?

cm²



What is the best estimate for the area of the shape in square centimetres?

- 26cm²
 28cm²
 24cm²
 22cm²

Rectangles

	Width	Height
A.	50cm	50cm
B.	60cm	40cm
C.	70cm	20cm
D.	60cm	25cm

Which rectangle has the smallest area?

- B
 C
 A
 D