



 = 100 people  
 = 10 people





What number do the people symbols show?

 = 1  
 = 10  
 = 100




What number do the counters show?

 = 2



What number do the counters show?




300



?

What number does the taller building show?



Estimate the value of the middle tree.