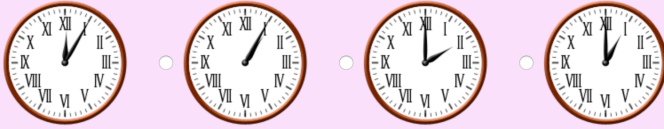
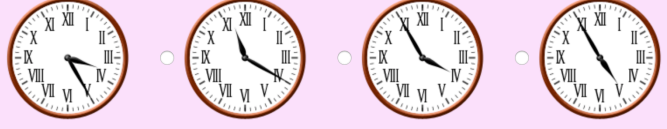


3M4c - Tell and write the time from an analogue clock, including using Roman numerals from I to XII

Which clock shows 1 o'clock?



Which clock shows 5 minutes to 4?




What time does the clock show?

- 1 minute past 7
- 5 minutes past 8
- 5 minutes past 7
- 1 minute past 8



What time does the clock show?

- 5 minutes to 7
- 5 minutes to 8
- 11 minutes to 7
- 25 minutes to 11



What time does the clock show?

- 5 minutes to 12
- 1 o'clock
- 12 o'clock
- 5 minutes past 12

Which clock shows 1 o'clock?

