




How many vertices does the 3D shape have?



How many faces does the 3D shape have?



How many edges does the 3D shape have?



What is the name of the 3D shape?

- Heptagonal prism
- Nonagonal prism
- Nonagonal pyramid
- Heptagonal pyramid


A.



B.



C.



D.



Which have one or more flat rectangular faces?

- B and C
- B, C and D
- None of them
- C

Which 3D shape has only 2 faces?

- Triangular based pyramid
- Sphere
- Cone
- Cylinder