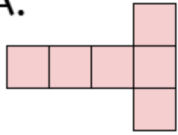
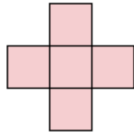


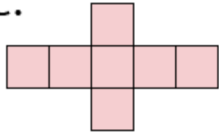
A.



B.



C.



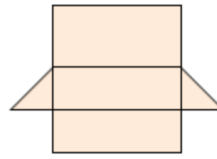
D.



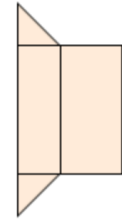
Which net will make a cube?

- A     C     D     B

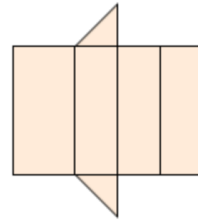
A.



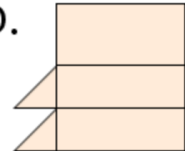
B.



C.

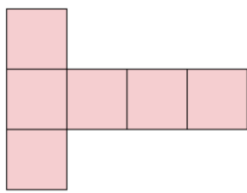


D.



Which net will make a triangular prism?

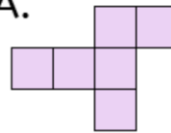
- B     C     A     D



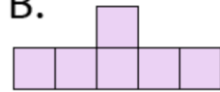
What 3D shape will the net make?

- Square based pyramid     Tetrahedron     Cube     Cuboid

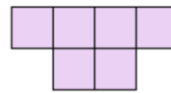
A.



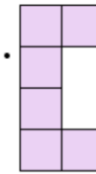
B.



C.



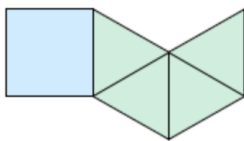
D.



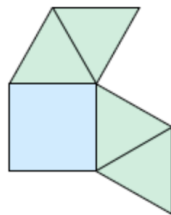
Which net will make a cube?

- A     D     B     C

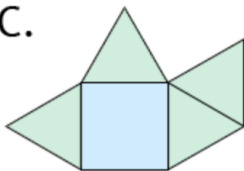
A.



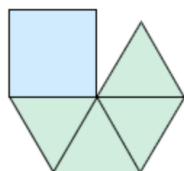
B.



C.



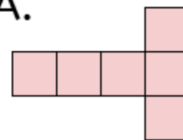
D.



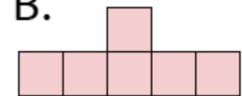
Which net will make a square based pyramid?

- B     C     D     A

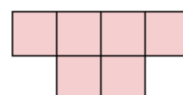
A.



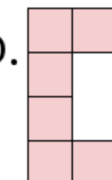
B.



C.



D.



Which net will make a cube?

- A     B     C     D