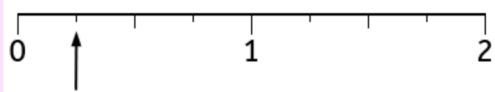


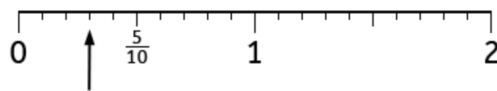
Number Line



What fraction is the arrow pointing to?

- $\frac{1}{8}$
 $\frac{1}{3}$
 $\frac{1}{4}$
 $\frac{3}{4}$

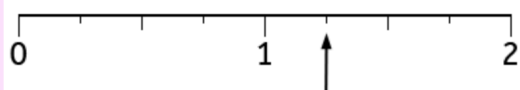
Number Line



What fraction is the arrow pointing to?

- $\frac{6}{10}$
 $\frac{3}{5}$
 $\frac{1}{3}$
 $\frac{3}{10}$

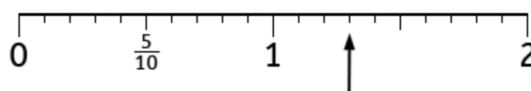
Number Line



What fraction is the arrow pointing to?

- $1\frac{1}{4}$
 $\frac{5}{8}$
 $\frac{2}{3}$
 $1\frac{1}{2}$

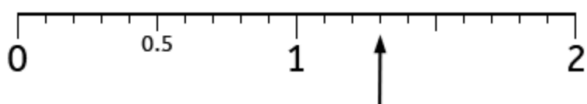
Number Line



What fraction is the arrow pointing to?


- $\frac{3}{10}$
 $\frac{2}{3}$
 $1\frac{5}{10}$
 $1\frac{3}{10}$

Number Line



What decimal number is the arrow pointing to?

- 4
 0.3
 1.5
 1.3



How long is the pencil in centimetres?

- 83 cm
 9.7 cm
 8 cm
 8.3 cm