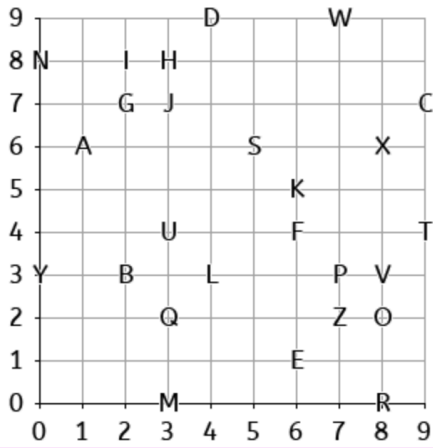
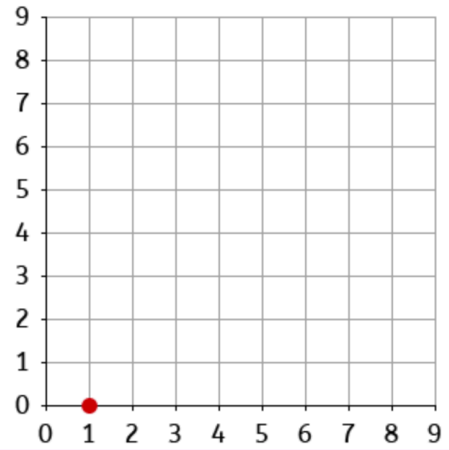


4P3a - Describe positions on a 2-D grid as co-ordinates in the first quadrant



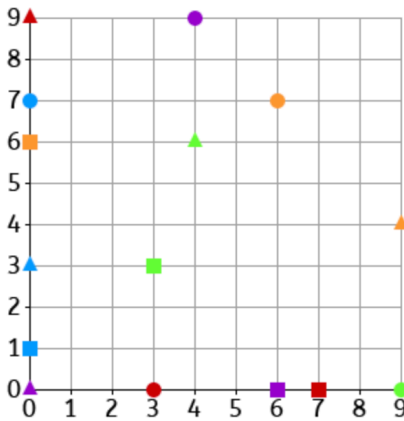
Write the word spelled out by these coordinates (9, 7), (1, 6), (8, 0) and (4, 9).

- WENT   
  CENT   
  WARD   
  CARD



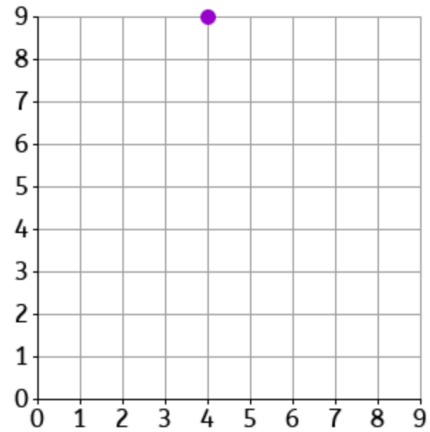
What are the coordinates of the circle?

- (0, 1)   
  (1, 0)   
  (1, 1)   
  (0, 0)



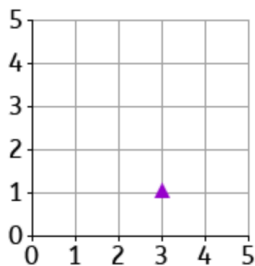
Which shape on the grid is at co-ordinates (0, 0)?

-    
     
     
  



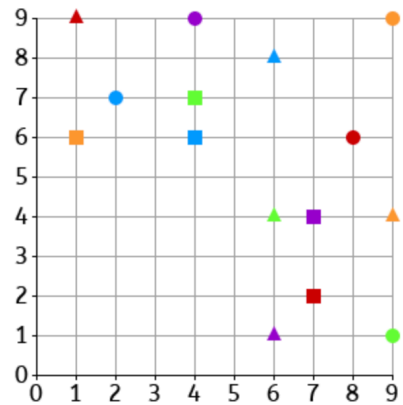
What are the coordinates of the circle?

- (4, 0)   
  (4, 9)   
  (9, 4)   
  (9, 0)



What are the coordinates of the triangle?

- (3, 3)   
  (3, 1)   
  (1, 3)   
  (1, 1)



Which shape on the grid is at co-ordinates (2, 7)?

-    
     
     
  