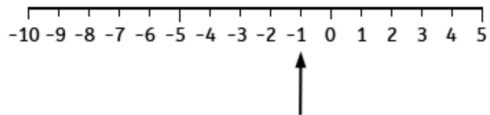
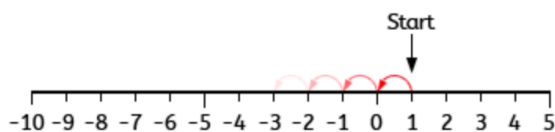


Number line from -10 to 5



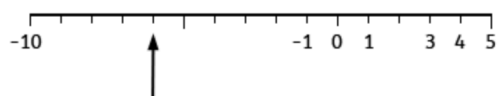
What number is the arrow pointing to on the number line?

Number line from -10 to 5




Start at 1.
Count back 5.
What number do you reach?

This number line has missing numbers

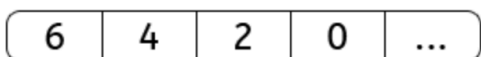


What is the missing number the arrow is pointing to?



What is the next number in the sequence?

Count backwards in steps of 2



What is the next number in the sequence?

Start at 2 and count back 5.
What number do you reach?